



Five Little Men and Flying Saucers Number Bonds of 5 Activity

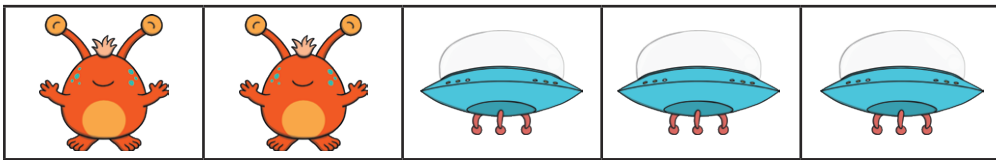
Can you complete the number sentences?



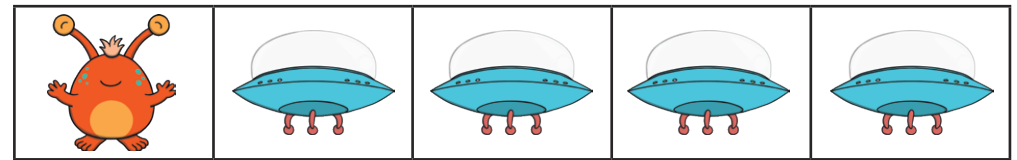
$$\boxed{3} + \boxed{} = \boxed{}$$




$$\boxed{4} + \boxed{} = \boxed{}$$



$$\boxed{2} + \boxed{} = \boxed{}$$



$$\boxed{} + \boxed{} = \boxed{}$$



$$\boxed{} + \boxed{} = \boxed{}$$